



Name: _____ Date: _____




How Many In All?

Count the food. Write an equation to show the parts and the whole.




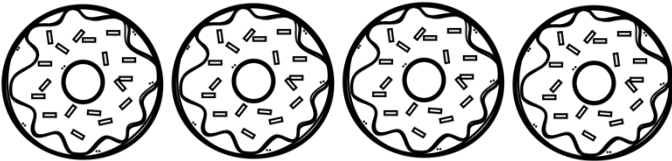
_____ + _____ = _____



_____ + _____ = _____



_____ + _____ = _____



_____ + _____ = _____



_____ + _____ = _____



_____ + _____ = _____