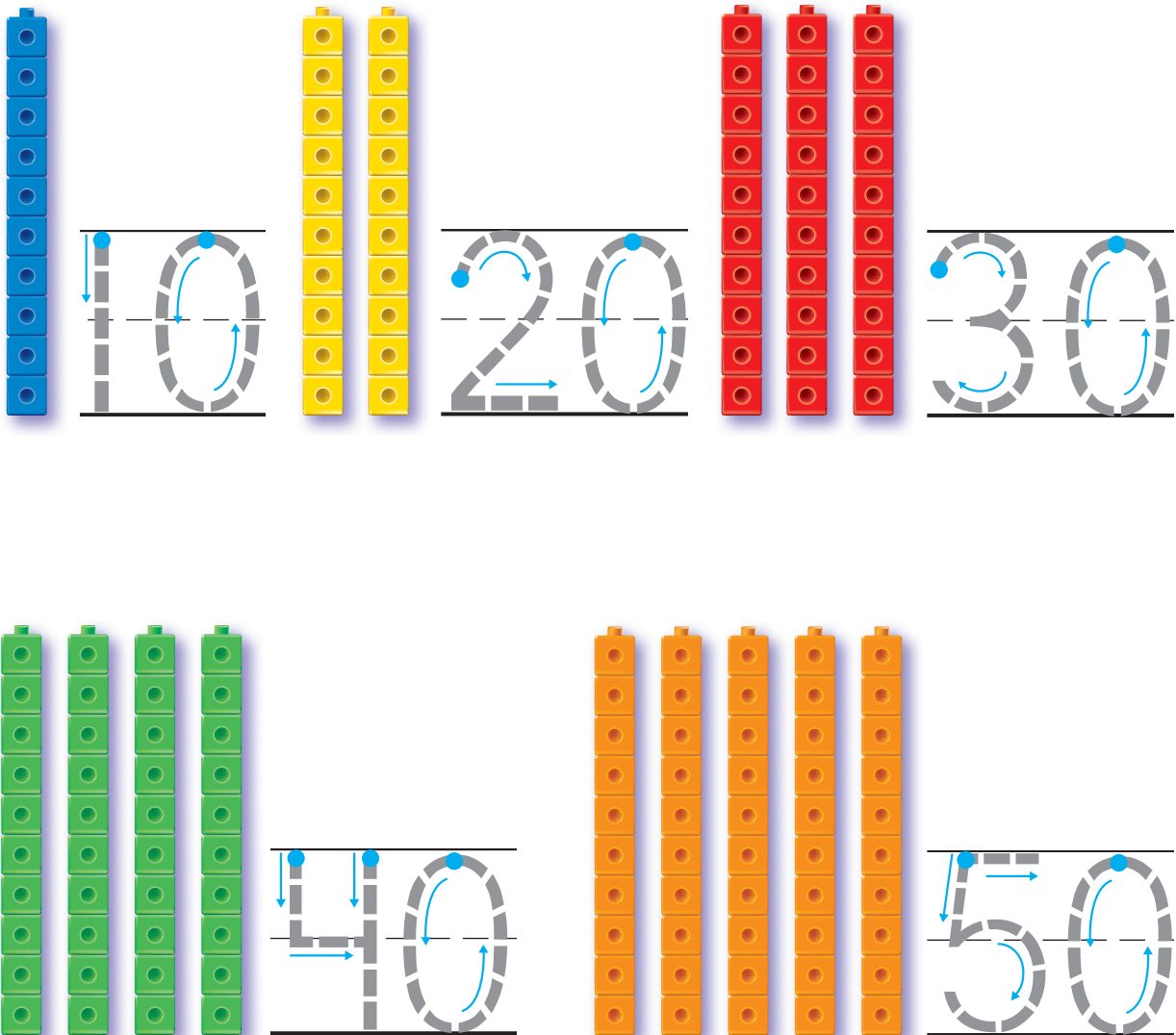


Name _____

Count by Tens

Essential Question How can you use sets of tens to count to 100?

Listen and Draw



DIRECTIONS Point to each set of cube towers as you count by tens. Trace the numbers as you count by tens.

Share and Show

1




10

20

30

2




10

20

30

3




10

20

30

4




30

40

50

5



30

40

50

DIRECTIONS 1–5. Point to each set of 10 as you count by tens.
Circle the number that shows how many.

338 three hundred thirty-eight

Name _____



60

70

80



60

70

80



80

90

100



80

90

100



80

90

100

DIRECTIONS 6–10. Point to each set of 10 as you count by tens.
Circle the number that shows how many.