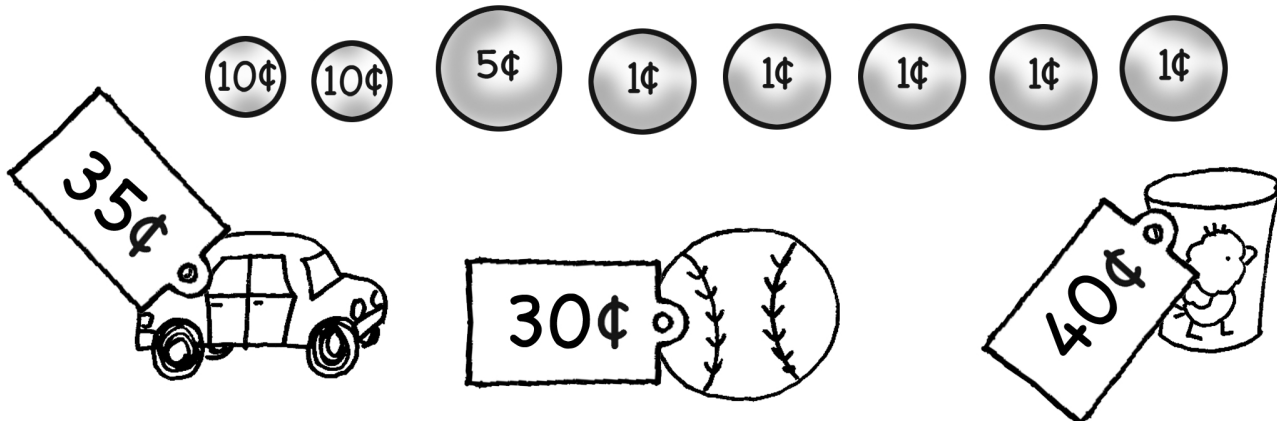




Name: _____

Coin Counting

Add each group of coins. Then circle the item below that can be bought for that same amount.



Name: _____

How much is this?



How much is this?



J, L, N, P, R, T,
_____, X, Z

37, ____, ____, 40, ____, 42,

What is ten more than 86?


6, 8, 10, 12, 14, 16,
_____, 20

In three years Amanda will
be in the sixth grade. What
grade is she currently in?

Draw a rectangle that is
about 3 cm long on each
side. Do not use a ruler. Just
guess!

V, V, Q, Q, V, V,
_____, Q, V, V, Q, Q

What time is it?



____:____

H, K, I, L, _____, M, K,
N, L, O, M, P, N, Q

What is ten less than 67?

Name: _____

How many dots on the bug?



How many?




How many?



Amy is reading book 3 of the My Club series. There are 9 books in the series. After she finishes book 3, how many more books will she read to finish the series?

What time is it?



____:____

Jason needs thirteen cents. How much more money does he need?



47, 48, ____, ____, 51,

____, ____

How many?



How many?



How many dots on the bug?



26, ____, 28, 29, ____,

How much is this?



Name: _____

Megan has six birds.
Anne has two dogs.
How many more pets
does Megan have?

Daniel has 7 friends.
Chris has 12 friends.
Which boy has an odd
number of friends?

Jessica ate 6 carrots.
Then she ate 2 more
carrots. How many
carrots did she eat in
all?

B, _____, J, N, R, V, Z

Double two.

9, 11, 13, _____, 17, 19

Alex took 3 shirts to the
thrift shop. Then he took
7 more shirts. How many
shirts did he take in all?

Adam, Peter, and
Robert went to the zoo.
Adam saw eight
penguins. Peter saw six
penguins. Robert saw
four penguins. How
many penguins did they
see in all?

Buster Bear ate two
cups of honey. His
mother ate four cups of
honey. His father ate six
cups of honey. How
many cups of honey did
they eat in all?

What is ten less than 64?

How many nickels do you
need if you want to have
exactly 30 cents?

What is ten more than 55?

Name: _____

There are many plants in April's house. There are three plants in April's room. There is one plant in the kitchen. There are five plants in the living room. How many plants are there in April's house?

Jacob is counting trucks. He counted four blue trucks. He counted seven red trucks. He counted three brown trucks. How many trucks did he count in all?

Megan went fishing. She caught 3 big fish. She caught an old shoe. She caught 2 little fish. She caught 3 more big fish. How many fish did she catch in all?

$$20 - \underline{\quad} = 16$$

36, , , 39, , 41,

$$\begin{array}{r} 9 \\ - 5 \\ \hline \end{array}$$

There are 3 chocolate ice cream sodas on the table. There are 8 vanilla ice cream sodas on the table. How many more vanilla sodas are there?

Mr. Smith has 18 ties. He gave his brother 7 ties. How many ties does he have now?

Kayla picked some flowers for her mother. She picked 5 yellow flowers. She picked 4 red flowers. She picked 8 blue flowers. She picked 6 pink flowers. How many flowers did she pick in all?

$$53 - \underline{\quad} = 43$$

$$\begin{array}{r} 4 \\ + 7 \\ \hline \end{array}$$

What is ten more than 58?

Name: _____

Holly made 10 cookies. She gave 3 cookies to her best friend. How many cookies are left?

Sara had \$8.21. She found 3 quarters and 9 pennies in the creek. How much money did she have?

Ms. Lee has twenty-five lollipops. She gave sixteen to her students. How many lollipops does she have left?

Write **fl** or **sn** to complete each word.

_____ake _____ag

_____at _____ore

100 more
than 489

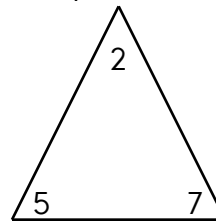
Write the missing sign.

11 ____ 2 = 9

ten less than
971



Fill in the blanks using numbers from the fact family.



$$\square + \square = \square$$

$$\square + \square = \square$$

$$\square - \square = \square$$

$$\square - \square = \square$$

$$\begin{array}{r} 6 \\ 5 \\ + 99 \\ \hline \end{array} \qquad \begin{array}{r} 7 \\ 8 \\ + 73 \\ \hline \end{array}$$

Write the number that comes before.

_____ 265 _____ 354

_____ 91 _____ 870

_____ 46 _____ 997

ten more than
514

Name: _____

Jenna, Rose, and Megan are so thankful for swimming. Jenna swam four hours last week. Rose swam three hours last week. Megan swam five hours last week. How many hours did they swim in all?

Miss Moore made 54 ice cream cones. Of that number, 30 were chocolate. How many cones were not chocolate?

Write how much to add or subtract.

$$21 \quad \begin{array}{c} \bigcirc \\ - 7 \end{array} \quad 14 \quad \begin{array}{c} \bigcirc \\ - 7 \end{array} \quad 7$$

Start with 21.Subtract 7. Repeat.

$$6 \quad \begin{array}{c} \bigcirc \end{array} \quad 11 \quad \begin{array}{c} \bigcirc \end{array} \quad 16$$

Start with ____.

Add _____. Repeat.

$$3 \quad \begin{array}{c} \bigcirc \end{array} \quad 6 \quad \begin{array}{c} \bigcirc \end{array} \quad 9$$

Start with ____.

Add _____. Repeat.

$$19 \quad \begin{array}{c} \bigcirc \end{array} \quad 10 \quad \begin{array}{c} \bigcirc \end{array} \quad 1$$

Start with ____.

Subtract _____. Repeat.

$$8 \quad \begin{array}{c} \bigcirc \end{array} \quad 14 \quad \begin{array}{c} \bigcirc \end{array} \quad 20$$

Start with ____.

Add _____. Repeat.

$$20 \quad \begin{array}{c} \bigcirc \end{array} \quad 12 \quad \begin{array}{c} \bigcirc \end{array} \quad 4$$

Start with ____.

Subtract _____. Repeat.

$$2 \quad \begin{array}{c} \bigcirc \end{array} \quad 4 \quad \begin{array}{c} \bigcirc \end{array} \quad 6$$

Start with ____.

Add _____. Repeat.

$$25 \quad \begin{array}{c} \bigcirc \end{array} \quad 15 \quad \begin{array}{c} \bigcirc \end{array} \quad 5$$

Start with ____.

Subtract _____. Repeat.

$$17 \quad \begin{array}{c} \bigcirc \end{array} \quad 13 \quad \begin{array}{c} \bigcirc \end{array} \quad 9$$

Start with ____.

Subtract _____. Repeat.

$$\begin{array}{r} 74 \\ + 16 \\ \hline \end{array}$$

Combine the words to make a compound word.

out + let = _____

waste + land = _____

$$42 + 2 = \underline{\hspace{2cm}}$$

word root **in** can mean **not** **insomnia, insane**