


Name: _____



Count by fives.

5, __, __,
20, __, 30,
35, __

Ann had ten pieces of
candy. She gave away
three. How many
were left?



Subtraction Problem	Answer

How much money is
in each row?



This clock shows...



4:00 6:00

Name: _____

Circle what you could buy with these coins.



Fill in the numbers that come between.

61 _ 63

64 _ 66

67 _ 69

Draw hands on this clock to show 8:00.



Seth counted five plastic ghosts in a tree and four more on some steps. How many plastic ghosts in all?



Addition Problem

Answer

Write in numbers to make each true.

18 > _

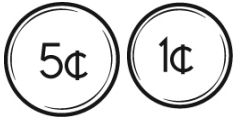
16 < _

19 = _



Name: _____

How much is this?


 26, 27, ____, 29, ____,

B, G, ____, Q, V

 Jacob needs fifteen cents.
 How much more money
 does he need?

 K, ____, r, K, l, r, K, l,
 r, K, l, r, K, l

 In three years Mary will be
 in the sixth grade. What
 grade is she currently in?

15, 17, 19, 21, ____, 25

What is ten more than 63?

How many?



What is ten less than 78?

B, F, J, ____, R, V, Z

How much is this?



Name: _____

B, E, H, K, N, Q,
_____, W, Z

46, ____, ____, 49, ____, 51

How many?



Circle all the ways to make 4.

3 + 1 2 + 2 1 + 3
4 + 2 3 + 3 1 + 1
2 + 3 4 + 1

How many?



How many dots on the bug?




C, F, I, L, O, R,
_____, X

What is ten more than 76?

14, 16, 18, 20, 22, 24,
26, 28, ____, 32

What time is it?




____:____

Circle the fourth letter.

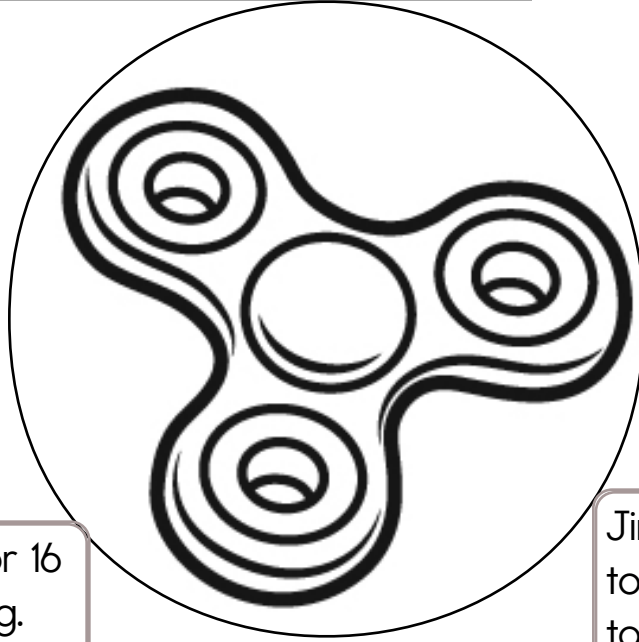
D, D, 2, 4, 2, B, 1, D, 8, D, F, 1, F,
1, 3, B, 6, F, D

What time is it?



____:____

Name: _____



How many times
do you need to spin?

I needed to spin _____
time(s) to finish the page.

Harry rode his bike for 16 minutes in the morning. He rode his bike for 10 minutes in the afternoon. How many more minutes did Harry ride his bike in the morning than in the afternoon?

There were 4 eggs in the first nest and 6 eggs in the second nest. How many more eggs were in the second nest than in the first nest?

Jim had 15 tomato seeds to plant. John had 11 tomato seeds to plant. How many more seeds did Jim have than John?

Beth took 9 turns on the skateboard. Ron took 11 turns on the skateboard. How many turns did they take in all?

For National Dolphin Day, John's family took a day cruise. The family spotted 6 dolphins heading out to the deep waters. They spotted 8 dolphins heading back to shore. How many dolphins did they see in all?

Lyle pitched 4 innings in his baseball game. Rex pitched 5 innings in his game. How many more innings did Rex pitch than Lyle?

On Earth Day the Boy Scouts planted 12 trees, and the Girl Scouts planted 12 trees. How many trees were planted in all?

Sally painted 9 watering cans for the craft fair on Monday. She painted 7 watering cans for the craft fair on Thursday. How many watering cans did she paint in all?



Name: _____

Get a fidget spinner! Spin it.

I needed to spin _____ time(s) to finish.

___ _ _
60 tens___ _ _ _
83 hundreds___ _
two tens___ _ _
46 tens___ _ _
three hundreds and six tens___ _ _
seven hundreds and four
tens___ _ _
39 tens___ _
four tens___ _
72 ones___ _ _ _
11 hundreds___ _ _
five hundreds and two ones___ _ _
six hundreds and nine tens___ _ _
21 tens___ _
nine tens___ _
50 ones___ _ _ _
99 hundreds___ _
48 ones___ _
eight tens___ _ _
seven hundreds and seven
ones___ _ _
six hundreds and three ones___ _ _
four hundreds and five ones___ _
55 ones___ _ _ _
86 hundreds___ _ _
three hundreds and eight
tens